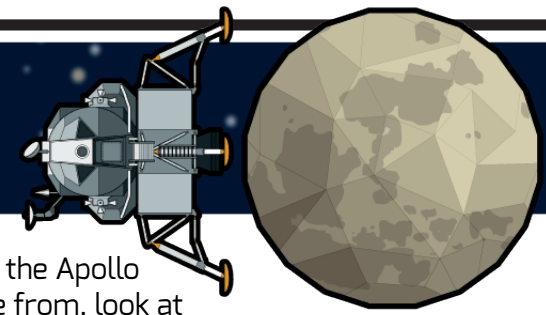



11.1 LOCATING LANDING SITES





TASK 1 **Label landing sites :** The coordinates next to the mission name give the location of the landing site. Find the correct location on the Moon map below. Label the landing site A? where ? is the mission number, and draw a line from the mission box to that point.

TASK 2 **Locate the lander:** For each of the Apollo missions that our samples come from, look at the lander coordinates and circle the lander on the map. Apollo 15 has been done for you as an example


APOLLO 15 (7,11)
Lander coordinates: (3,1)



APOLLO 14 (7,7)
Lander coordinates: (2,3)



APOLLO 17 (11,10)
Lander coordinates: (4,3)



APOLLO 17 (9,6)
Lander coordinates: (3,2)

